

CHAPTER 7: Linear Momentum

Problems

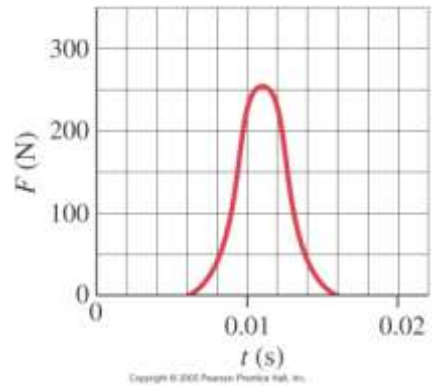
7-1 and 7-2 Momentum and Its Conservation

3. (II) A 0.145-kg baseball pitched at 39.0 m/s is hit on a horizontal line drive straight back toward the pitcher at 52.0 m/s. If the contact time between bat and ball is 3.00×10^{-3} s, calculate the average force between the ball and bat during contact.
5. (II) Calculate the force exerted on a rocket, given that the propelling gases are expelled at a rate of 1500 kg/s with a speed of 4.0×10^4 m/s (at the moment of takeoff).
8. (II) A 9300-kg boxcar traveling at 15.0 m/s strikes a second boxcar at rest. The two stick together and move off with a speed of 6.0 m/s. What is the mass of the second car?
10. (II) A 3800-kg open railroad car coasts along with a constant speed of 8.60 m/s on a level track. Snow begins to fall vertically and fills the car at a rate of 3.50 kg/min. Ignoring friction with the tracks, what is the speed of the car after 90.0 min?

7-3 Collisions and Impulse

15. (II) A golf ball of mass 0.045 kg is hit off the tee at a speed of 45 m/s. The golf club was in contact with the ball for 3.5×10^{-3} s. Find (a) the impulse imparted to the golf ball, and (b) the average force exerted on the ball by the golf club.
18. (II) You are the design engineer in charge of the crashworthiness of new automobile models. Cars are tested by smashing them into fixed, massive barriers at 50 km/h (30 mph). A new model of mass 1500 kg takes 0.15 s from the time of impact until it is brought to rest. (a) Calculate the average force exerted on the car by the barrier. (b) Calculate the average deceleration of the car.

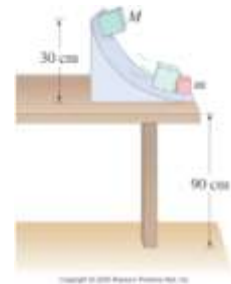
20. (II) Suppose the force acting on a tennis ball (mass 0.060 kg) points in the $+x$ direction and is given by the graph of Fig. 7–33 as a function of time. Use graphical methods to estimate (a) the total impulse given the ball, and (b) the velocity of the ball after being struck, assuming the ball is being served so it is nearly at rest initially.



7–4 and 7–5 Elastic Collisions

25. (II) A 0.060-kg tennis ball, moving with a speed of 2.50 m/s, collides head-on with a 0.090-kg ball initially moving away from it at a speed of 1.15 m/s. Assuming a perfectly elastic collision, what are the speed and direction of each ball after the collision?
26. (II) A softball of mass 0.220 kg that is moving with a speed of 8.5 m/s collides head-on and elastically with another ball initially at rest. Afterward the incoming softball bounces backward with a speed of 3.7 m/s. Calculate (a) the velocity of the target ball after the collision, and (b) the mass of the target ball.

29. (III) In a physics lab, a cube slides down a frictionless incline as shown in Fig. 7–35, and elastically strikes another cube at the bottom that is only one-half its mass. If the incline is 30 cm high and the table is 90 cm off the floor, where does each cube land? [Hint: Both leave the incline moving horizontally.]

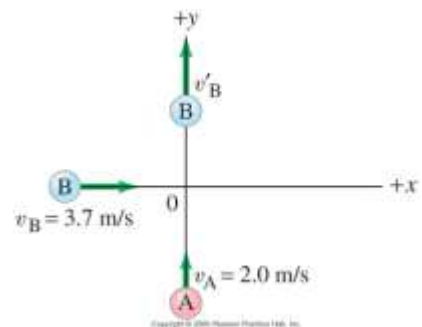


7–6 Inelastic Collisions

34. (II) An internal explosion breaks an object, initially at rest, into two pieces, one of which has 1.5 times the mass of the other. If 7500 J were released in the explosion, how much kinetic energy did each piece acquire?

7–7 Collisions in Two Dimensions

44. (III) Two billiard balls of equal mass move at right angles and meet at the origin of an xy coordinate system. Ball A is moving upward along the y axis at 2.0 m/s, and ball B is moving to the right along the x axis with speed 3.7 m/s. After the collision, assumed elastic, ball B is moving along the positive y axis (Fig. 7–37). What is the final direction of ball A and what are their two speeds?



7-8 Center of Mass

48. (I) The CM of an empty 1050-kg car is 2.50 m behind the front of the car. How far from the front of the car will the CM be when two people sit in the front seat 2.80 m from the front of the car, and three people sit in the back seat 3.90 m from the front? Assume that each person has a mass of 70.0 kg.

*7-10 CM and Translational Motion

- *58. (II) A 55-kg woman and an 80-kg man stand 10.0 m apart on frictionless ice. (a) How far from the woman is their CM? (b) If each holds one end of a rope, and the man pulls on the rope so that he moves 2.5 m, how far from the woman will he be now? (c) How far will the man have moved when he collides with the woman?

General Problems

79. A block of mass $m = 2.20$ kg slides down a 30.0° incline which is 3.60 m high. At the bottom, it strikes a block of mass $M = 7.00$ kg which is at rest on a horizontal surface, Fig. 7-46. (Assume a smooth transition at the bottom of the incline.) If the collision is elastic, and friction can be ignored, determine (a) the speeds of the two blocks after the collision, and (b) how far back up the incline the smaller mass will go.

